


1 Fill in the missing numbers.

10 less than 46 is

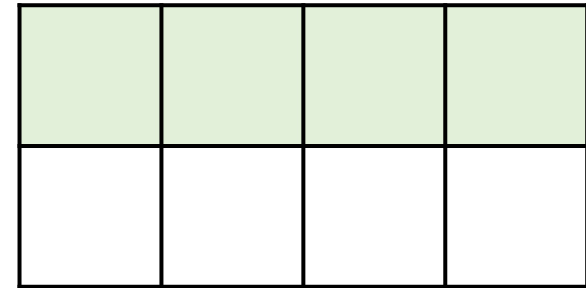
more than 30 is 35

2



How many sweets does Teddy have?

3 Lucy shades in part of a rectangle.



She shades some more squares.

$\frac{3}{4}$ of the rectangle is now shaded.

How many more squares did Lucy shade?

1 Fill in the missing numbers.

100 less than 20,000 is

more than 20,000 is 20,600

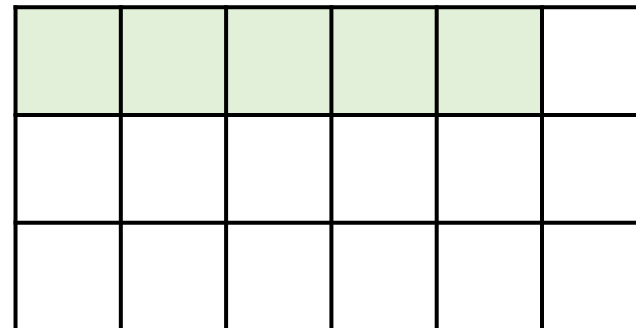
2



25% of my
number is 24

What number is Teddy thinking of?

3 Lucy shades in part of a rectangle.



She shades some more squares.

$\frac{7}{9}$ of the rectangle is now shaded.

How many more squares did Lucy shade?