

<https://vimeo.com/464966035>

ADD AND SUBTRACT  
2-DIGIT AND 3-DIGIT  
NUMBERS – NOT  
CROSSING 10 OR 100



**GET READY**



1) Which of these calculations are equal to 12?

$4 + 8$

$8 + 4$

$10 + 2$

$2 + 10$

2) Which of these calculations are equal to 5?

$12 - 7$

$7 - 12$

$3 - 8$

$8 - 3$

3) Write 4 calculations using the digit cards.



1) Which of these calculations are equal to 12?

$4 + 8$

$8 + 4$

$10 + 2$

$2 + 10$

2) Which of these calculations are equal to 5?

$12 - 7$

$7 - 12$

$3 - 8$

$8 - 3$

3) Write 4 calculations using the digit cards.



$3 + 4 = 7$

$7 - 4 = 3$

$4 + 3 = 7$

$7 - 3 = 4$

$7 = 3 + 4$

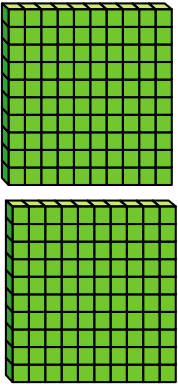
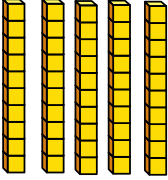

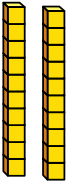

$3 = 7 - 4$

$7 = 4 + 3$

$4 = 7 - 3$


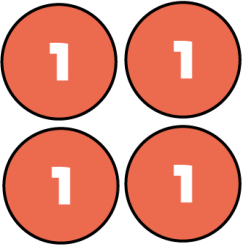
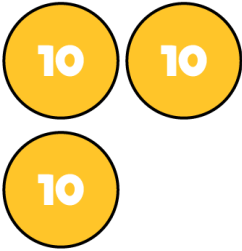

LET'S LEARN



Hundreds	Tens	Ones
		
		

+

H	T	O
2	5	2
	2	3
2	7	5

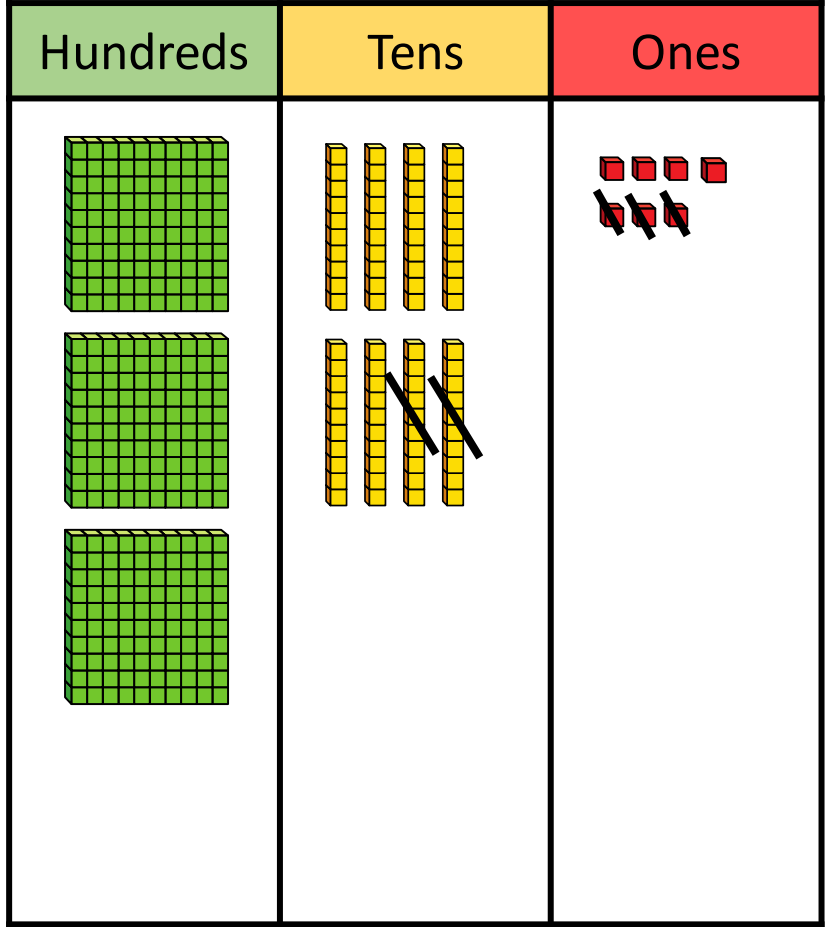
Hundreds	Tens	Ones
		
		

+

H	T	O
2	0	4
	3	2
2	3	6


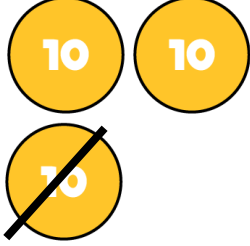

	H	T	O
	3	1	4
+	4	2	
	7	3	4

	H	T	O
	3	1	4
+		4	2
	3	5	6



—

H	T	O
3	8	7
	2	3
3	6	4

Hundreds	Tens	Ones
		

Have a think



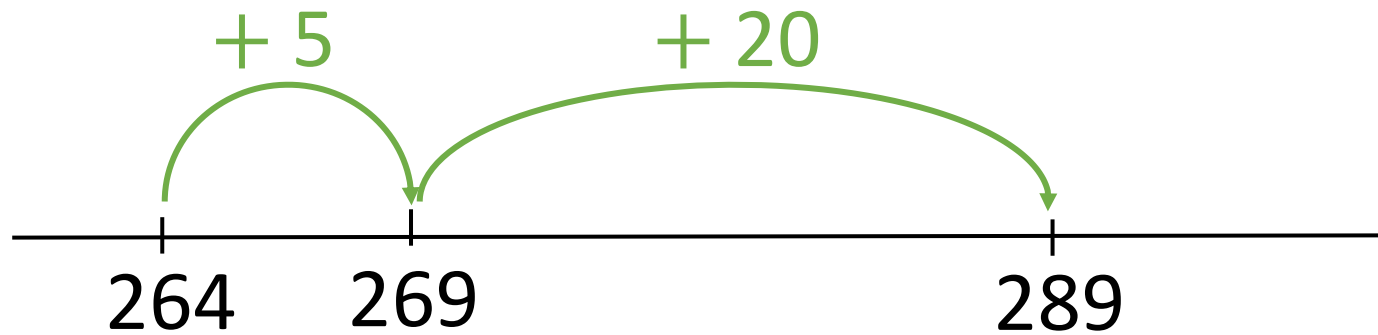
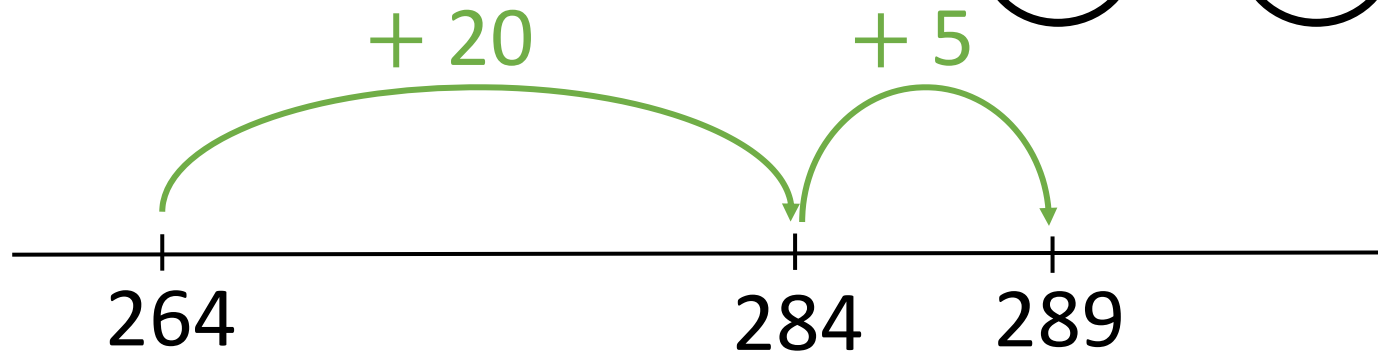
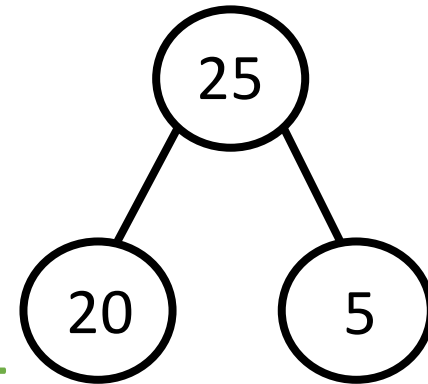
	H	T	O
	4	3	7
—		1	7
	4	2	0

**YOUR TURN**

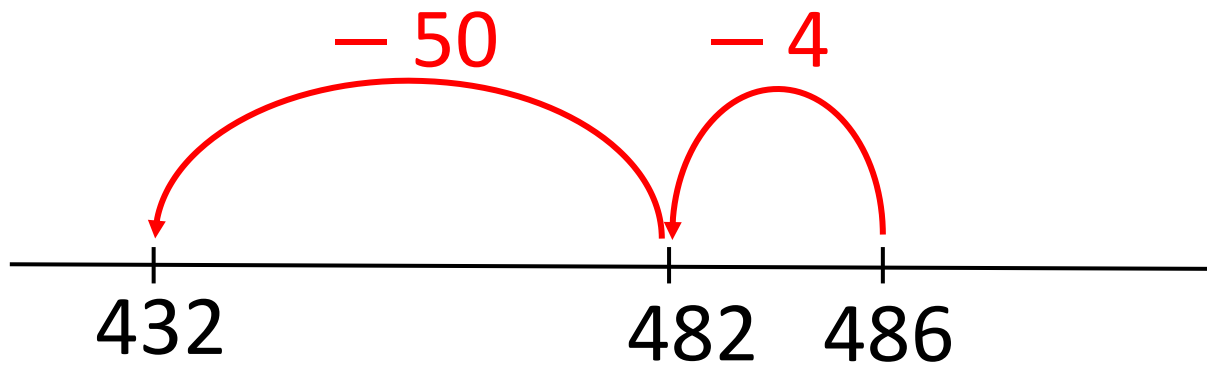
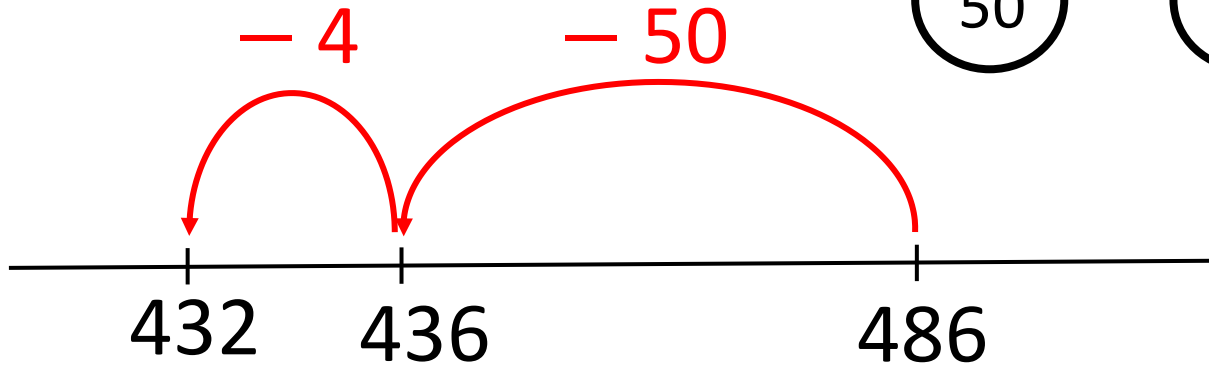
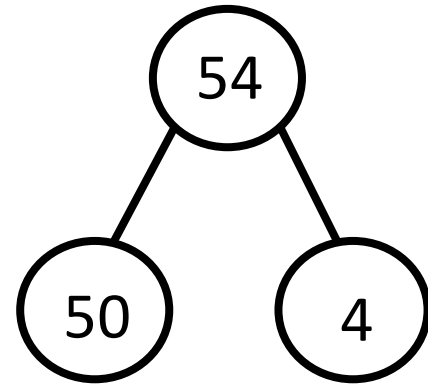
Have a go at question  
1 - 3 on the worksheet



$$264 + 25 = 289$$



$$486 - 54 = 432$$



**YOUR TURN**

Have a go at question  
4 – 6 on the worksheet



~~0~~   ~~1~~   ~~3~~   ~~4~~   ~~6~~

	H	T	O
	4	6	3
+		1	0
	4	7	3

**YOUR TURN**

Have a go at the rest of  
the questions on the  
worksheet

