

<https://vimeo.com/465482465>

ADD TWO
3-DIGIT NUMBERS -
NOT CROSSING 10
OR 100



GET READY



1) Add 25 and 14 together.

2) $3 + 5 = 4 + \underline{\quad}$

3) Write 5 pairs of numbers that add up to 9

1) Add 25 and 14 together.

39

2) $3 + 5 = 4 + \underline{4}$

3) Write 5 pairs of numbers that add up to 9

0 and 9

1 and 8

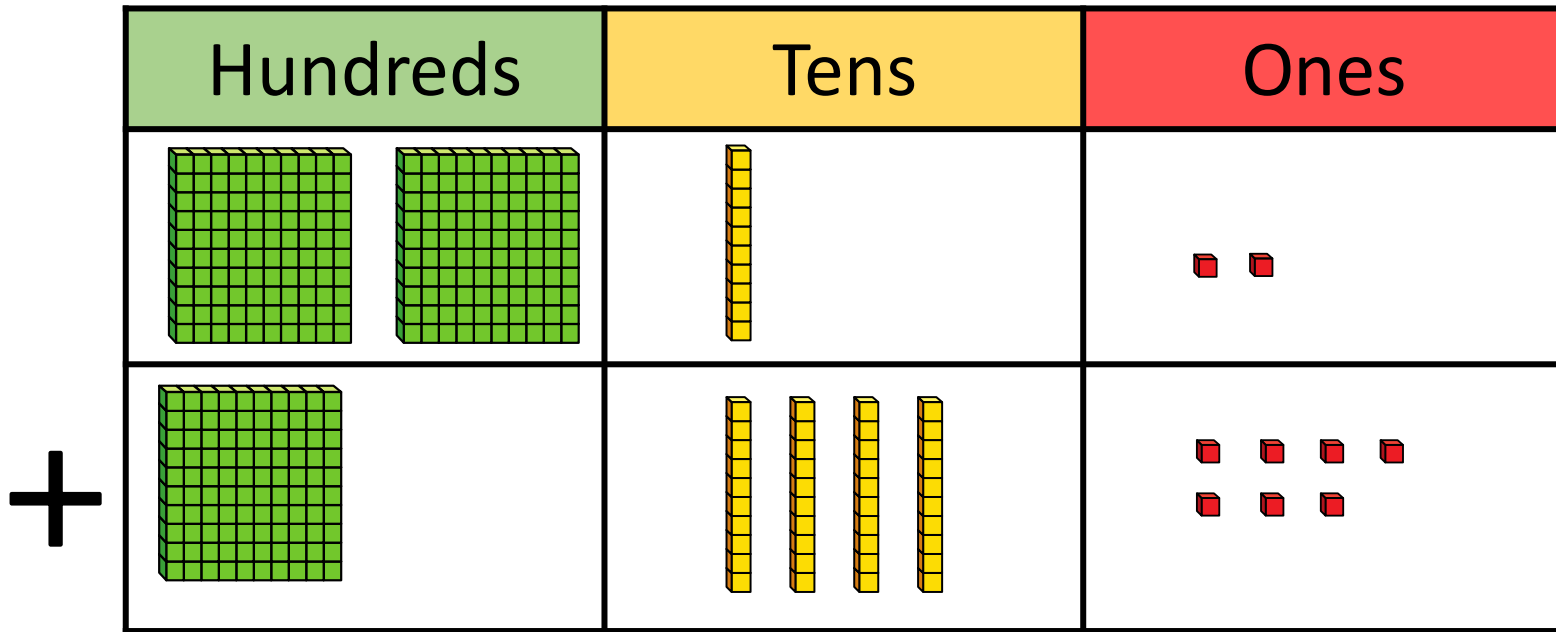
2 and 7

3 and 6

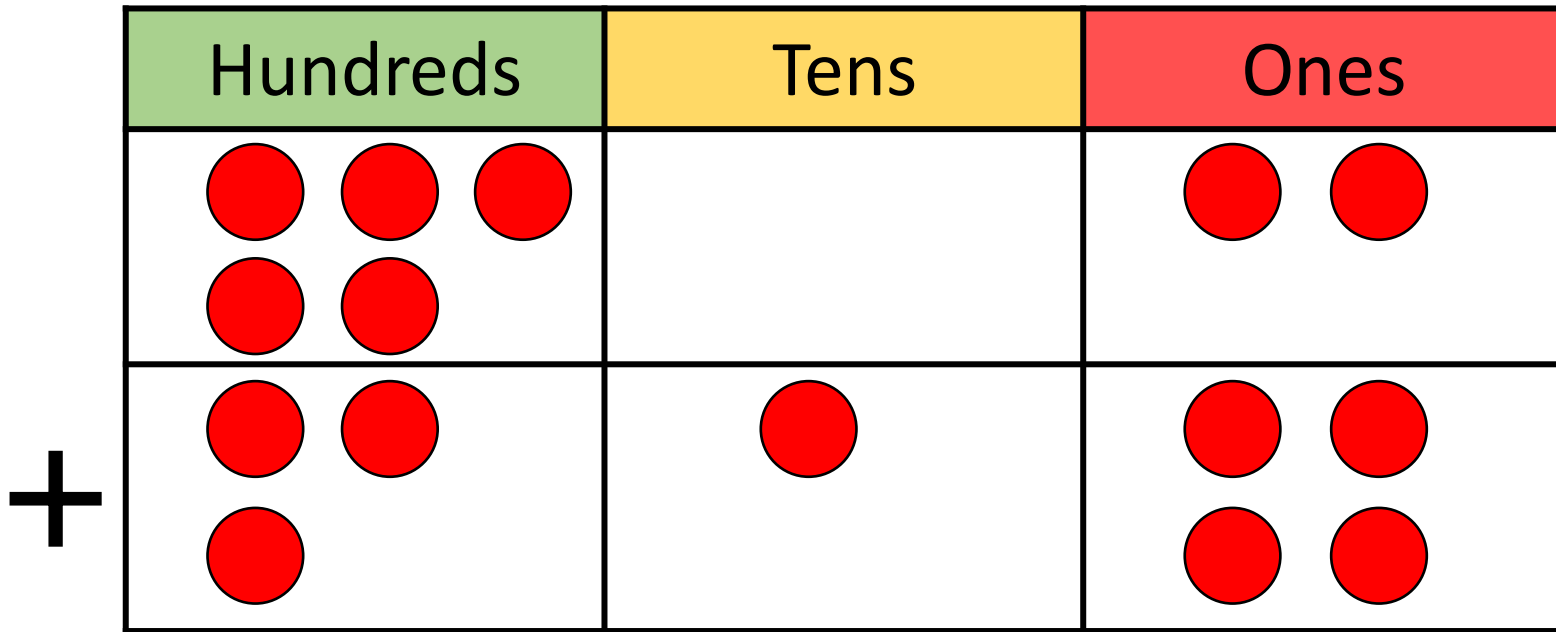
4 and 5

LET'S LEARN





| | H | T | O |
|---|---|---|---|
| | 2 | 1 | 2 |
| + | 1 | 4 | 7 |
| | 3 | 5 | 9 |



+

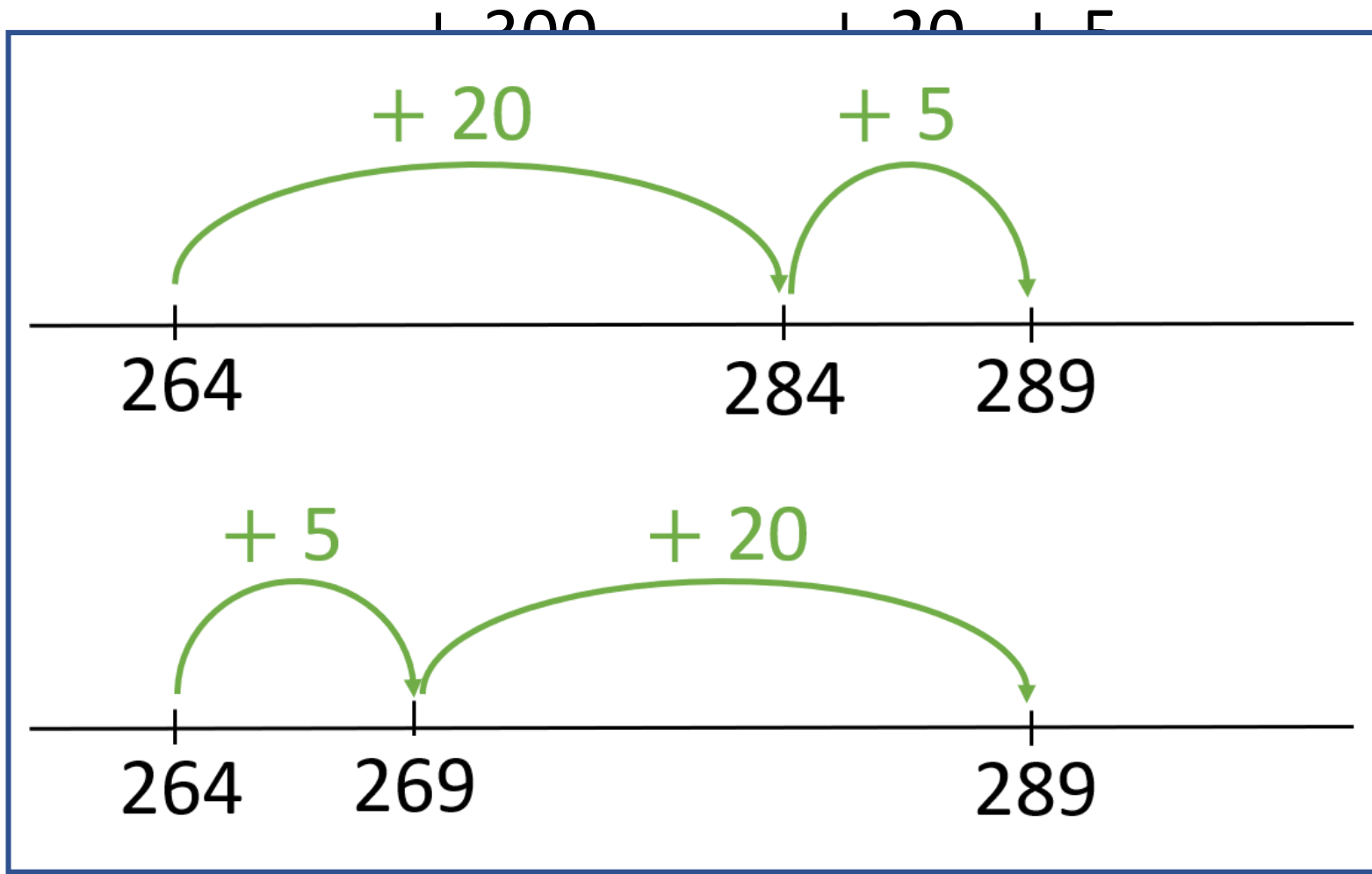
| | H | T | O |
|---|---|---|---|
| | 5 | 0 | 2 |
| + | 3 | 1 | 4 |
| | 8 | 1 | 6 |

YOUR TURN

Have a go at questions
1 – 3 on the worksheet



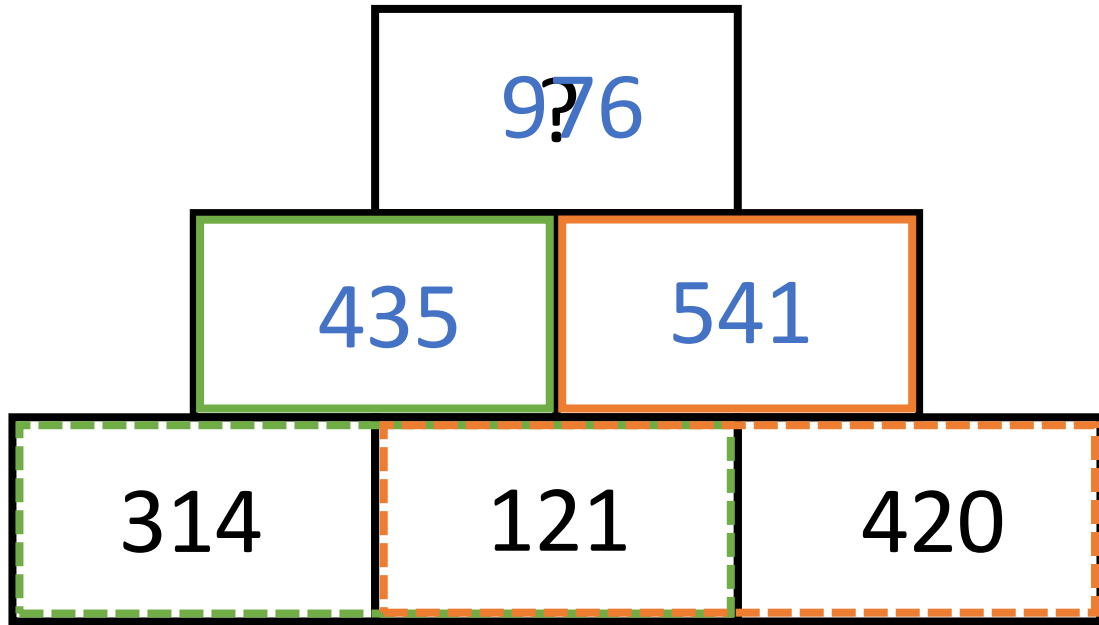
$$613 + 325 = 938$$




YOUR TURN

Have a go at questions
4 – 6 on the worksheet





| | | | | | | | | | |
|---|---|---|---|---|---|---|--|---|---|
| | H | T | | H | T | O | | T | O |
| | 3 | 1 | | 5 | 4 | 1 | | 2 | 0 |
| + | 1 | 2 | + | 4 | 3 | 5 | | 2 | 1 |
| | 4 | 3 | | 9 | 7 | 6 | | 4 | 1 |



679

Have a think



353 326

231 122 204

| | | | | | | | |
|---|---|---|---|---|---|---|---|
| | H | T | H | T | H | T | O |
| | 2 | 3 | 3 | 5 | 2 | 0 | 4 |
| + | 1 | 2 | 3 | 4 | 1 | 2 | 2 |
| | 3 | 5 | 6 | 7 | 3 | 2 | 6 |

YOUR TURN

Have a go at the rest of
the worksheet

