

<https://vimeo.com/465738425>

ADD TWO 3-DIGIT NUMBERS - CROSSING 10 OR 100



GET READY



- 1) Partition 14 into tens and ones.
- 2) Calculate $7 + 6$
- 3) $8 + \underline{\quad} = 17$
- 4) Write 3 pairs of numbers which total 11

1) Partition 14 into tens and ones.

$$10 + 4 \quad 1 \text{ ten} + 4 \text{ ones}$$

2) Calculate $7 + 6 = 13$

3) $8 + \underline{9} = 17$

4) Write 3 pairs of numbers which total 11

$$\begin{array}{ccc} 11 + 0 & 9 + 2 & 7 + 4 \\ 10 + 1 & 8 + 3 & 6 + 5 \end{array}$$

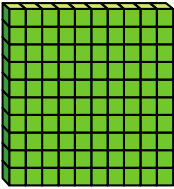

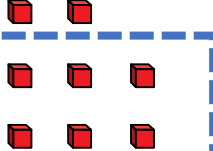

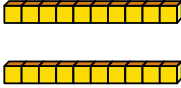
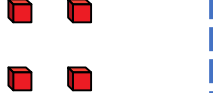
LET'S LEARN



Mr Rose earns £124 on Monday.

He earns £138 on Tuesday.


How much does he earn in total? £262

Hundreds	Tens	Ones
		
		
2	6	12

+


H	T	O
1	3	8
1	2	4
2	6	2
	1	

✗



Dexter scores 351 points in a game.

Rosie scores 263 points.



How much do they score altogether? **614**

H	T	O
3	5	1
2	6	3
6	1	4

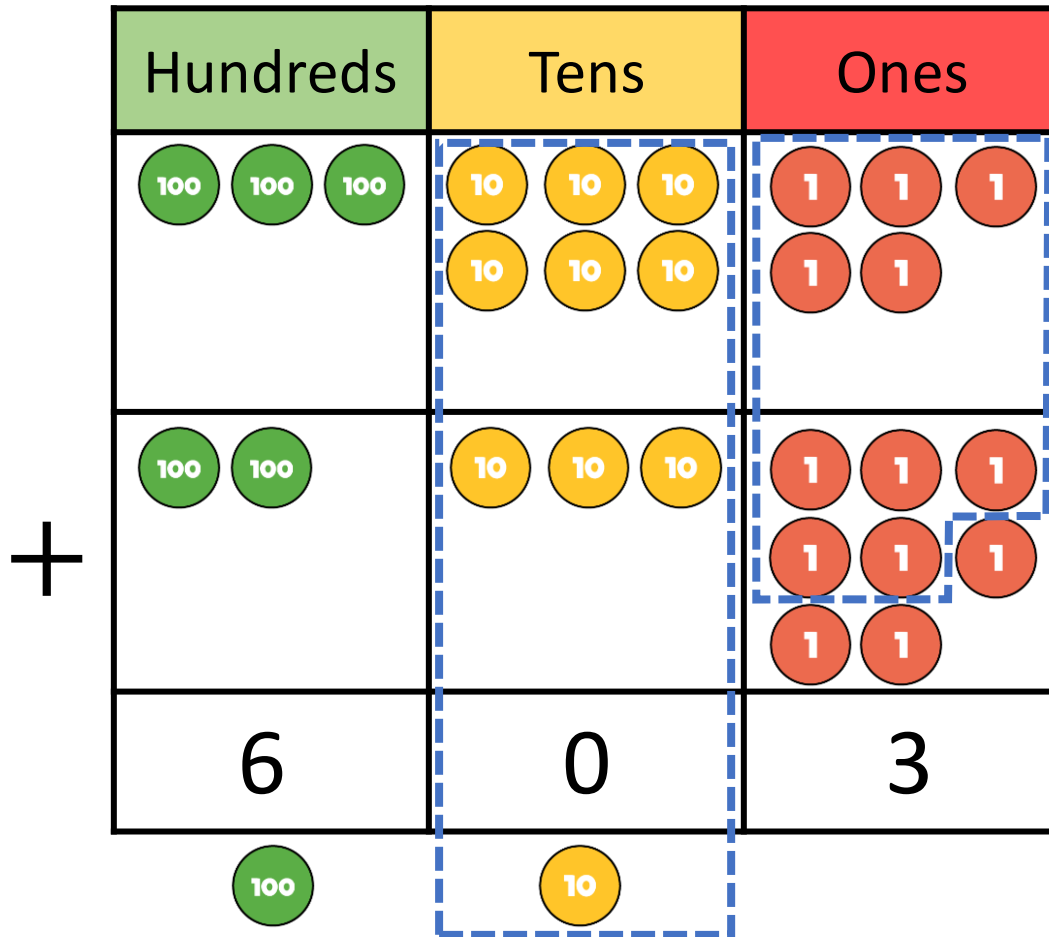
1

+

Hundreds	Tens	Ones
6	1	4

100

$$238 + 365 = 603$$




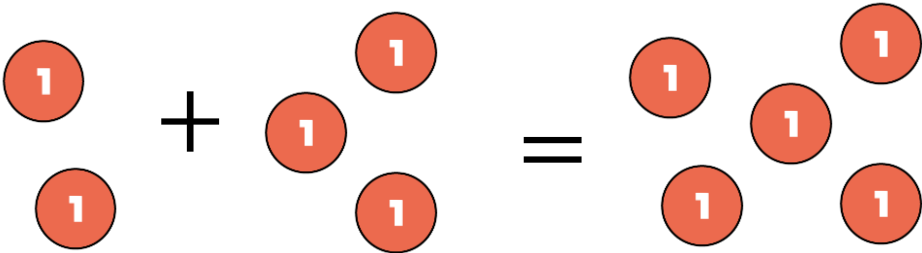
H	T	O
3	6	5
2	3	8
6	0	3
1	1	

YOUR TURN

Have a go at questions
1 – 3 on the worksheet

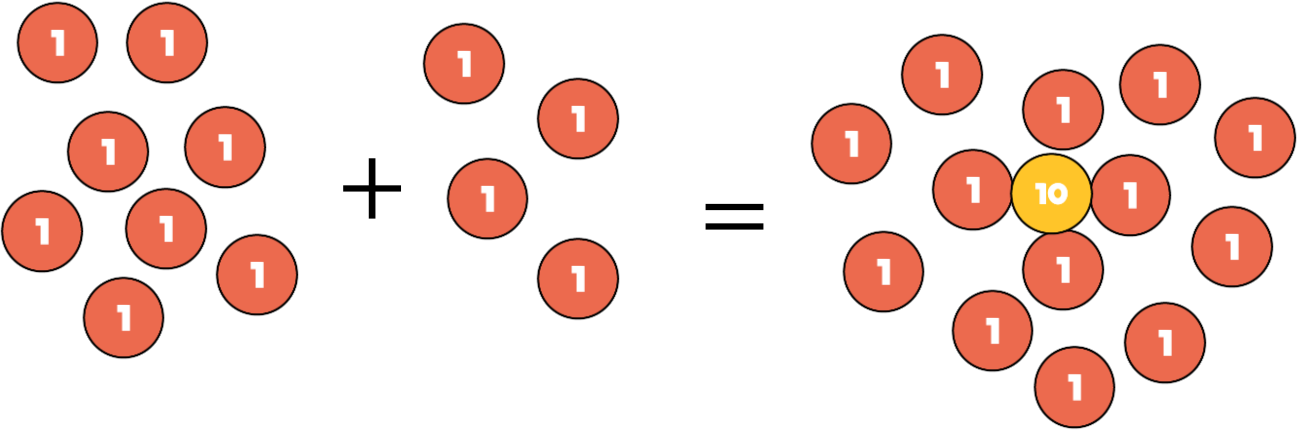


$422 + 273 = 695$ 



$178 + 154 =$

The answer will have a 2 in the ones place.



Have a think



1) $407 + 266 =$

The answer will have a 3 in the ones place.

$$7 + 6 = 13$$

$$13 = 1 \text{ ten} + 3 \text{ ones}$$

2) $813 + 139 =$

The answer will have a 2 in the ones place.

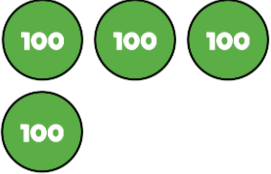
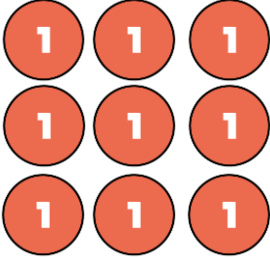

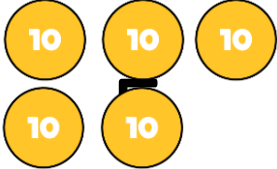
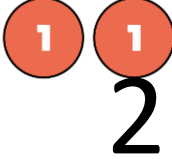
$$3 + 9 = 12$$

$$12 = 1 \text{ ten} + 2 \text{ ones}$$

YOUR TURN

Have a go at questions
4 – 5 on the worksheet



Hundreds	Tens	Ones
	<div style="border: 1px solid blue; width: 100%; height: 100%;"></div>	
<div style="border: 1px solid blue; width: 100%; height: 100%;"></div>		<div style="border: 1px solid blue; width: 100%; height: 100%;"></div>
<div style="border: 1px solid blue; width: 100%; height: 100%;"></div>		

10

	H	T	O
	4	<div style="border: 1px solid blue; width: 30px; height: 30px;"></div>	9
+		2	<div style="border: 1px solid blue; width: 30px; height: 30px;"></div>
	<div style="border: 1px solid blue; width: 30px; height: 30px;"></div>	5	2
		1	

YOUR TURN

Have a go at the rest of
the worksheet

