

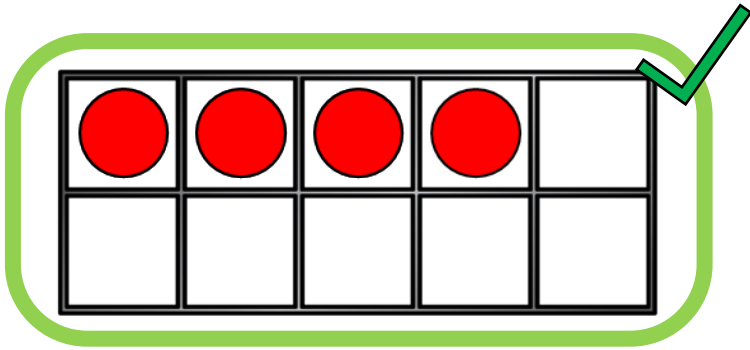
COMPARE OBJECTS



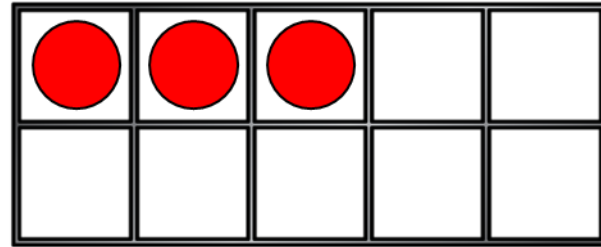
GET READY




Which has more?




or



or



or



LET'S LEARN




Less than, equal to or greater than

<

=

>


Have a think



10



=



10

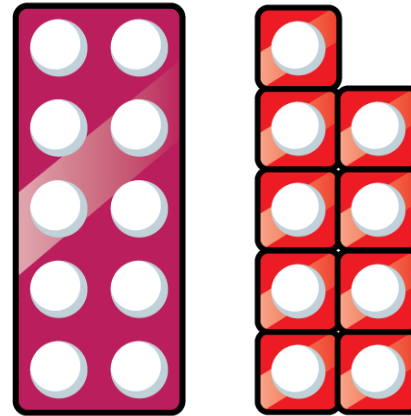

Less than, equal to or greater than

<

=

>

Have a think



10

<

10 + 9

1	2	3	4	5	6	7	8	9	10	11	12	13	14	15	16	17	18	19
---	---	---	---	---	---	---	---	---	----	----	----	----	----	----	----	----	----	----

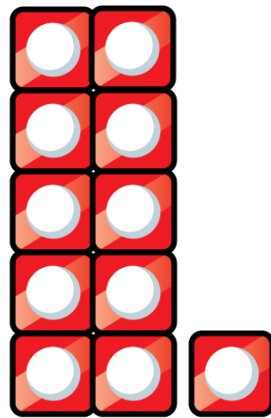
Less than, equal to or greater than

<


=

>

Have a think



11



10

>




Less than, equal to or greater than

<

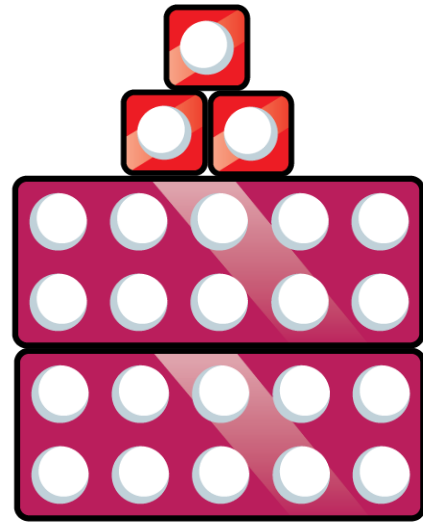
=

>

Have a think



25



20 + 3

>

21	22	23	24	25	26	27	28	29
----	----	----	----	----	----	----	----	----

YOUR TURN

Have a go at the
worksheet

