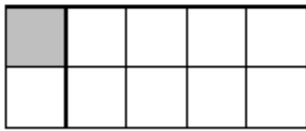


L.O. Number bonds to 100.

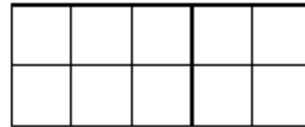
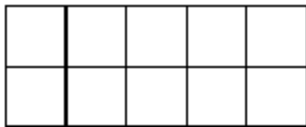
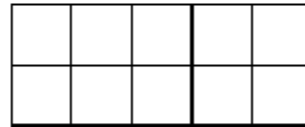
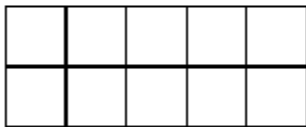
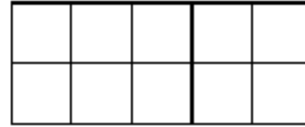
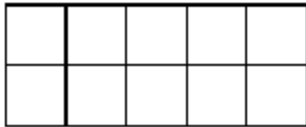
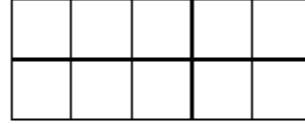
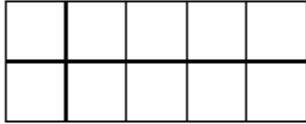
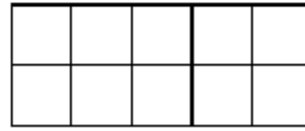


Find all number bonds to 100 using the 100 frames to represent them.  
The first one has been done for you

= 10



$10 + 90$

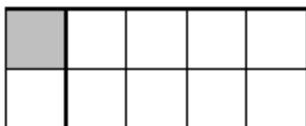


L.O. Number bonds to 100.



Find all number bonds to 100 using the 100 frames to represent them.  
The first one has been done for you

= 10



$10 + 90$

