


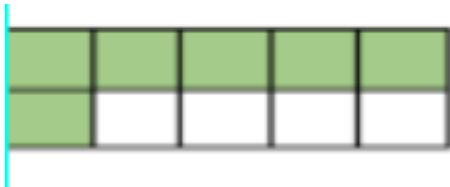


Match the number sentence to correct tens frame.



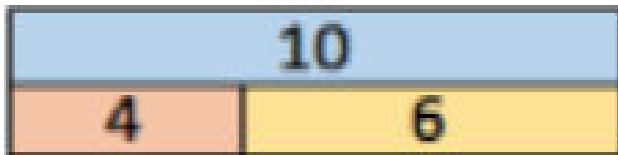
$$50 + 50$$

$$100 + 0$$

$$60 + 40$$

$$20 + 80$$

Look at the bar models and complete the number sentences.

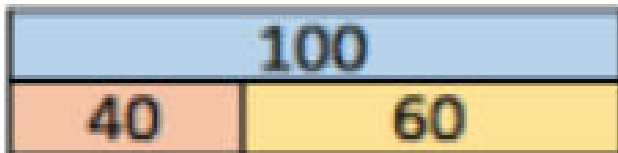


$$4 + \square = 10$$

$$4\square + \square 0 = 100$$

$$10 - \square = 6$$

$$60 + \square = 100$$



$$40 + \square = 100$$

$$100 - \square 0 = 60$$