

Answers

1 Anna has made a number.

| Hundreds | Tens | Ones |
|----------|------|------|
| | | |

What number has Anna made?

425

Is the number odd or even?

How do you know?

The number is odd because it has an odd digit in the ones place value column.

(Explanation needed for award of the mark - only the word 'odd' is insufficient).



1 mark



1 mark

2 Circle the number that has the digit 7 in the tens column.

725 572 257



1 mark

3 Max is making a number using some counters. Max chooses 6 counters.

He makes a number greater than 300

Circle the counters Max could have chosen.

Any 6 counters circled whose sum is more than (not equal) to



300. Exactly 6 counters should be circled.



1 mark

4 Match the numbers.

Six hundred and six ~~676~~

Six hundred and sixty ~~606~~

Six hundred and seventy-six ~~660~~



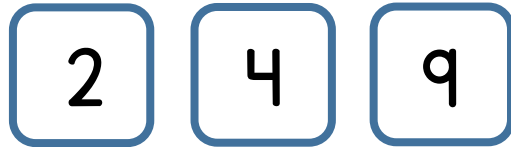
2 marks

5 Complete the missing numbers.

| | | | | | | |
|-----|-----|-----|-----|-----|-----|-----|
| 255 | 265 | 275 | 285 | 295 | 305 | 315 |
|-----|-----|-----|-----|-----|-----|-----|

2 marks

6 Here are some digit cards.



Max uses the cards to make a 3 digit number.
Write down all the numbers between 250 and 550 Max can make.

294

429

492. All 3 numbers for 2 marks.

2 correct numbers for 1 mark.

7 What is 100 less than 719?

619

What is 10 more than 97?

107

What is 10 less than 205?

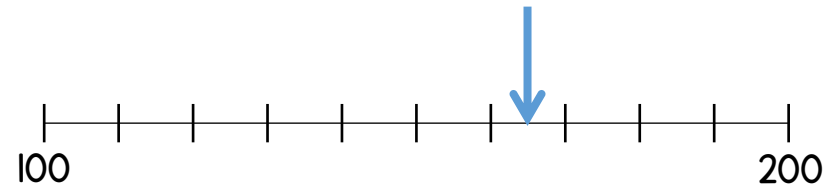
195

2 marks

3 marks

1 mark per correct answer.

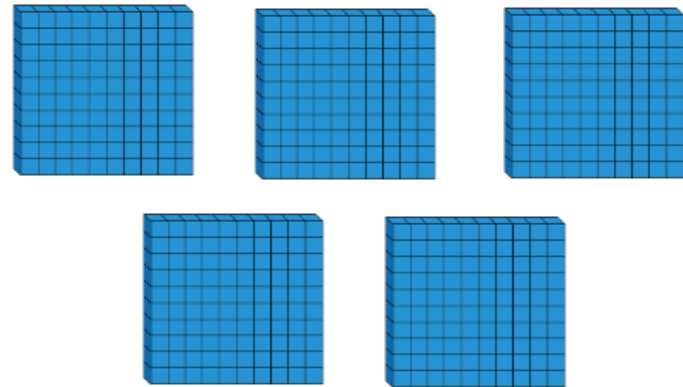
8 What number is the arrow pointing to?



165

1 mark

9 How many tens are there in 500?



50

1 mark

Circle how confident you feel with place value.

1 2 3 4 5
Not Very
confident confident