

Kilometres



- 1 There are 1,000 metres (m) in 1 kilometre (km).
Use the bar models to complete the sentences.

1 km
1,000 m

a)

1 km	1 km

There are m in 2 km.

b)

1 km	1 km	1 km

There are m in 3 km.

c)

1,000 m	1,000 m	1,000 m	1,000 m	1,000 m

There are 5,000 m in km.

- 2 Complete the statements.

a) 1,000 m = km d) km = 4,000 m

b) 9,000 m = km e) 7 km = m

c) m = 8 km f) 3 = 3,000

- 3 Complete the statements.

a) 6,000 m = km

6,100 m = km m

6,200 m = km m

6,450 m = km m

b) 4,300 m = km m

5,300 m = km m

6,300 m = km m


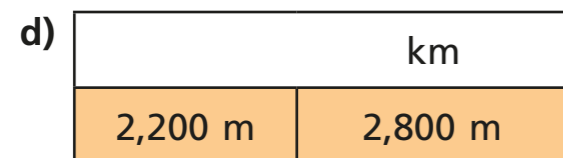
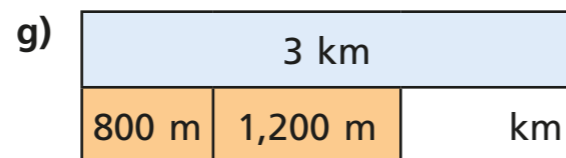
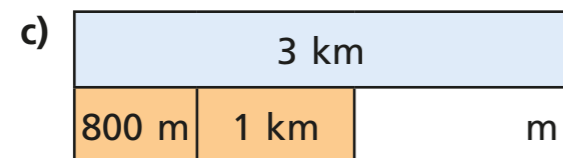
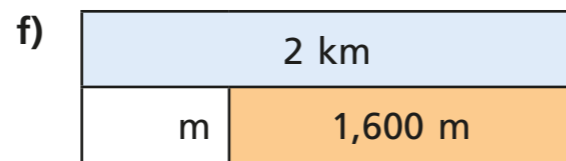
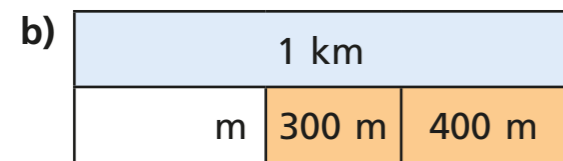
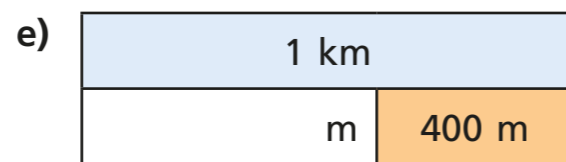
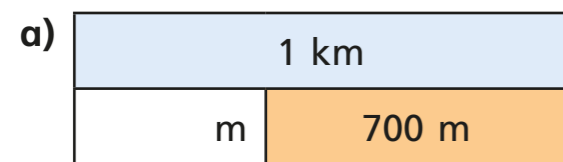
c) m = 2 km 600 m

3 km 200 m = m

9 km 500 m = m

9 km 50 m = m

4 Complete the bar models.



5 Write $>$, $<$ or $=$ to make the statements correct.

a) 700 m 6 km c) 3 km $2 \text{ km } 600 \text{ m}$

b) $5,000 \text{ m}$ 5 km d) $\frac{1}{2} \text{ km}$ 500 m

6 One morning, Filip walks 6 km.

In the afternoon, he walks another 3,800 m.

How far does Filip walk altogether?

7 Complete the table.

Pupil	How far they live from school (km)	How far they live from school (m)
Dani	2 km	
Scott		7,000 m
Kim	$\frac{1}{2} \text{ km}$	
Nijah		2,500 m
Teddy	$1\frac{3}{4} \text{ km}$	

8 Aisha lives $1\frac{1}{2} \text{ km}$ away from school.

a) How many metres is that?

She walks to and from school 5 days a week.

b) Does Aisha walk more than 10 km in a week?

Show your workings.

