

MMXII

1) There are 6 sweets in  $\frac{1}{2}$  of a bag.

How many sweets are there in a full bag? **12**

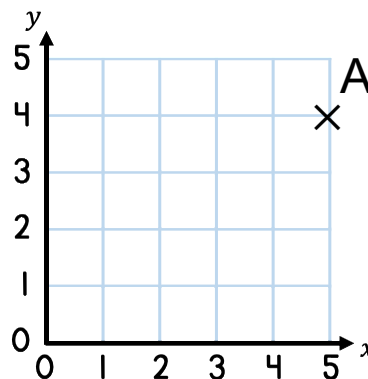
2)  $\frac{3}{8} = \frac{3}{4} \div 2$

3)  $2\frac{1}{3} - \frac{2}{3} = 1\frac{2}{3}$

4)  $0.26 + 1.06 = 1.32$

CCCLVI

1) What are the coordinates of point A?  $(5, 4)$



2)  $\frac{1}{2}$  a cake is shared between 4 children.

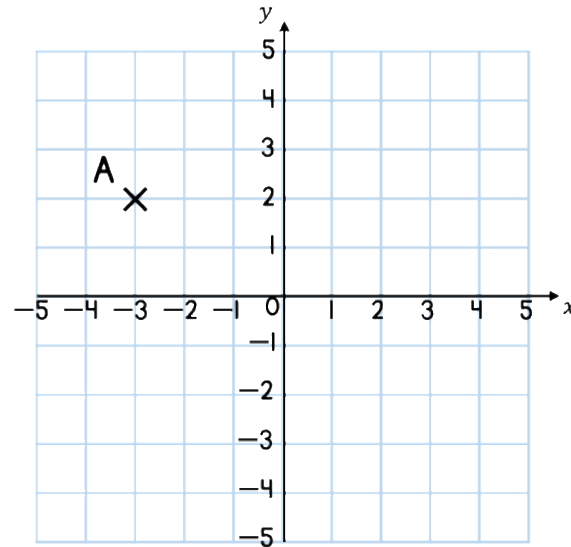
What fraction of the cake do they each get?

 $\frac{1}{8}$ 

3)  $\frac{3}{4} \times 4$   $3$

4)  $4,032 \times 36$   $145,152$

- 1) What are the coordinates of point A?  $(-3, 2)$



2)  $\frac{1}{9} \times 2 + 4$   $4\frac{2}{9}$

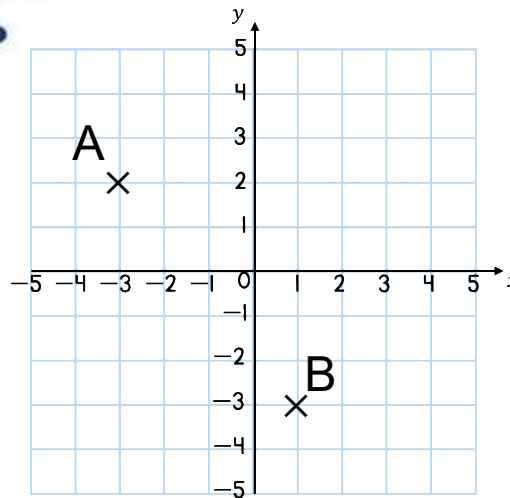
3)  $2\frac{2}{5} + 1\frac{3}{10}$   $3\frac{7}{10}$

4)  $7,501 \div 3$   $2,500 \text{ r}1$

D

- 1) Describe the translation from A to B.

4 squares to the right  
and 5 squares down



- 2) Work out  $\frac{9}{10}$  of 250 g. 225 g

3)  $\frac{2}{5} \times \frac{1}{8} = \frac{1}{20}$

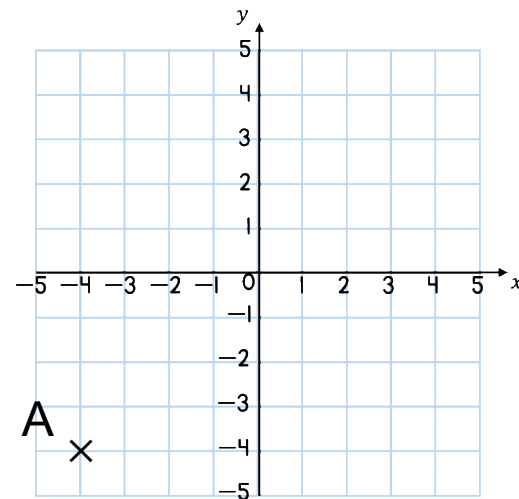
- 4) Express  $\frac{1}{2}$  as a percentage and as a decimal 50% 0.5

LXXXIV

1) A is translated 2 squares up and 5 squares to the right.

What are the new coordinates?

(1, -2)



2)  $\frac{1}{5}$  of  $\boxed{75} = 15$

3) Write the fractions in ascending order:

$\frac{1}{4}$     $\frac{3}{7}$     $\frac{3}{18}$     $\frac{3}{18}$     $\frac{1}{4}$     $\frac{3}{7}$

4) Adjacent angles on a straight line sum to 180°