



Comparing Numbers to 10 in the Orchard


Farmer Joe grows apples and pears in his orchard. Can you look at his trees and count the amount of fruit on each one? Write the totals in the boxes. Then, circle the tree with either the most or fewest.




Two apple trees are shown. The top tree has 4 red apples, and the bottom tree has 6 red apples. Each tree has an empty box next to it for counting.




Two pear trees are shown. The top tree has 8 yellow pears, and the bottom tree has 6 yellow pears. Each tree has an empty box next to it for counting.




Circle the tree with the **most** apples and the tree with the **most** pears.



Circle the tree with the **fewest** apples and the tree with the **fewest** pears.



Two apple trees are shown. The top tree has 3 red apples, and the bottom tree has 1 red apple. Each tree has an empty box next to it for counting.



Two pear trees are shown. The top tree has 3 yellow pears, and the bottom tree has 8 yellow pears. Each tree has an empty box next to it for counting.