



Number Bonds to 10 Ten-Frame Activity


Use the pictures on the ten-frame to help you work out the number bonds to 10.




$$\boxed{1} + \boxed{} = \boxed{10}$$




$$\boxed{3} + \boxed{} = \boxed{}$$




$$\boxed{8} + \boxed{} = \boxed{}$$



$$\boxed{} + \boxed{} = \boxed{10}$$




$$\boxed{} + \boxed{6} = \boxed{}$$



$$\boxed{10} + \boxed{} = \boxed{}$$

Can you create your own?



$$\boxed{} + \boxed{} = \boxed{}$$



$$\boxed{} + \boxed{} = \boxed{}$$