

Week beginning 19th April 2021

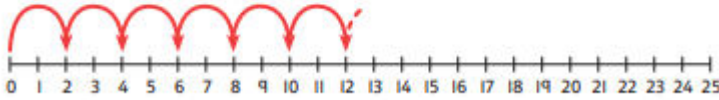
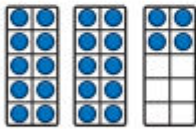
Lesson 1

<https://www.bbc.co.uk/bitesize/articles/zkqv382>

Watch the above video and complete the work

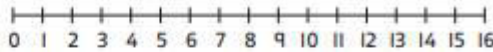
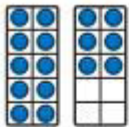
1 There are 12 pairs of shoes.

How many shoes are there in total?



There are shoes in total.

2 There are 16 shoes. How many pairs are there?



There are pairs of shoes.

3 Complete each number track.

CHALLENGE

a)

16	18		22		26	28		32
----	----	--	----	--	----	----	--	----

b)

	30	32			38		42	
--	----	----	--	--	----	--	----	--

c)

40			34	32		28
----	--	--	----	----	--	----

I can see all these numbers end in 0, 2, 4, 6 or 8. Is this always true?




Counting in 2s

1 How many  are there?

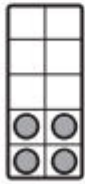


There are .

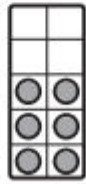
2 Complete the  and write which numbers come next.



2



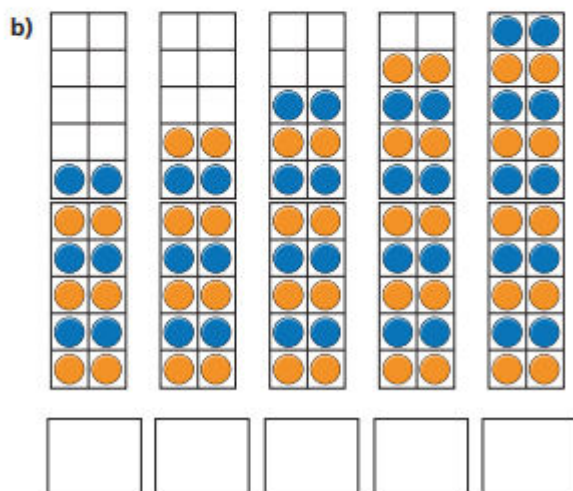
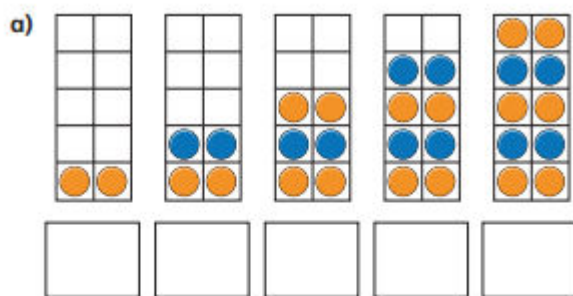
4



6



1 What are the numbers?



4 Fill in the missing numbers.

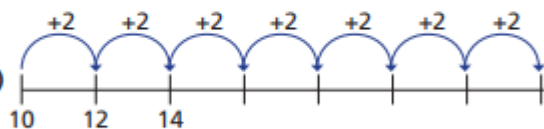
a)



b)



c)



5 How far can you count up in 2s?

Work with a partner.

Can you count up to 50 together?

Now try counting down in 2s from 50

2 How many flowers are there?



There are flowers.

3 Circle 14 socks.

