

Maths Week beginning 26th April 2021 Year 1

Lesson 1

<https://vimeo.com/521502274>

What things did you find to count in tens?

Practise counting forwards and backwards in tens like Tiny did.

Count in tens and colour the 100 chart



1	2	3	4	5	6	7	8	9	10
11	12	13	14	15	16	17	18	19	20
21	22	23	24	25	26	27	28	29	30
31	32	33	34	35	36	37	38	39	40
41	42	43	44	45	46	47	48	49	50
51	52	53	54	55	56	57	58	59	60
61	62	63	64	65	66	67	68	69	70
71	72	73	74	75	76	77	78	79	80
81	82	83	84	85	86	87	88	89	90
91	92	93	94	95	96	97	98	99	100

1 How many muffins are there altogether?

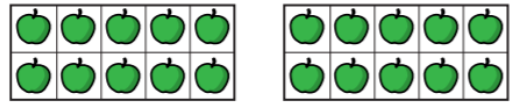


There are muffins on each tray.

There are trays.

There are muffins altogether.

2 How many apples are there altogether?

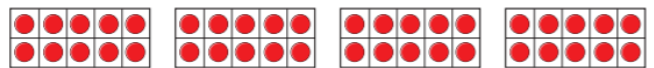


There are apples on each ten frame.

There are ten frames.

There are apples altogether.

3 How many counters are there altogether?




There are counters altogether.

4 Complete the number tracks.



5 Tom has these balloons.



He needs 60 balloons for a party.

Does Tom have enough balloons? _____

How do you know?

Lesson 3

<https://vimeo.com/521503480>




YOUR TURN

Using plates, can you make equal groups of objects?

Lesson 4

<https://vimeo.com/528943216>


1 Match the pictures to the labels.



equal groups

unequal groups

2 Complete the sentences.

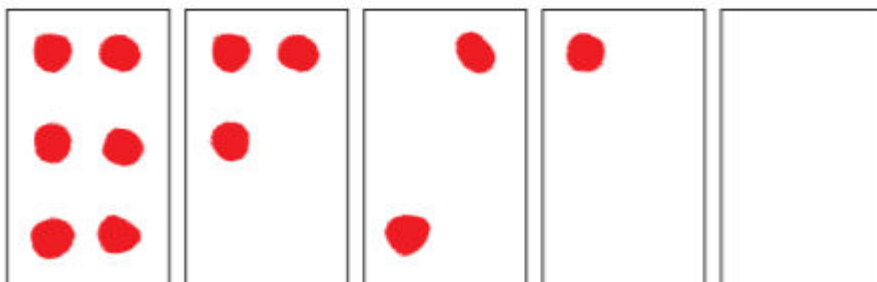


There are equal groups of




There are equal groups of

3 Kim is drawing 5 equal groups of 6
Finish Kim's drawing.



4 Ron and Mo have some cherries.



Who has made equal groups? _____

How do you know?

5 Use objects in your classroom to make these groups.

- 5 equal groups of 3
- 3 equal groups of 5
- 4 equal groups of 6
- 2 equal groups of 10

Talk about your answers.

Which numbers make equal groups? Test these numbers out to find out. Will they make 2 equal groups? 3 equal groups? 4 equal groups or even more?

10

9

15

12

8

21