


WRITE DECIMALS



GET READY



1) Complete the stem sentences.

Tens	Ones	tenths	hundredths

There are ___ tens, ___ ones, ___ tenths and ___ hundredths.

The number is _____

2) What is the value of the 3 in these numbers?

23.9

14.3

20.03

30.89

1) Complete the stem sentences.

Tens	Ones	tenths	hundredths
2	4	6	1

There are 2 tens, 4 ones, 6 tenths and 1 hundredths.

The number is 24.61

2) What is the value of the 3 in these numbers?

23.9
3 ones
3

14.3
3 tenths
0.3

20.03
3 hundredths
0.03

30.89
3 tens
30

LET'S LEARN




YOUR TURN

Have a go at questions
1 – 3 on the worksheet




Tens	Ones	tenths	hundredths
	● ● ●		● ● ● ●
0	3	0	4

Don't forget your place value holder. This is 3.04



This is 3.4



Which of these numbers need a place value holder adding?

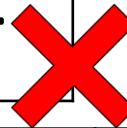
Tens	Ones	tenths	hundredths
1	2	0	4



Tens	Ones	tenths	hundredths
1	2	0	0



Tens	Ones	tenths	hundredths
0	2	1	4



Have a think

Tens	Ones	tenths	hundredths
0	2	1	0



Tens	Ones	tenths	hundredths
1	0	0	2

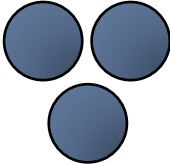
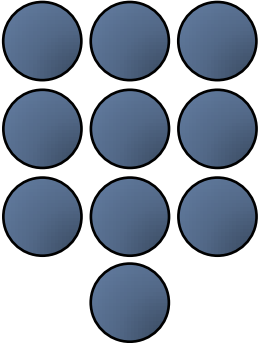
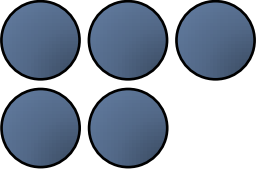


YOUR TURN

Have a go at question 4
on the worksheet



Tens	Ones	tenths	hundredths
		●	●●● ●●● ●●● ●
	0	0	10

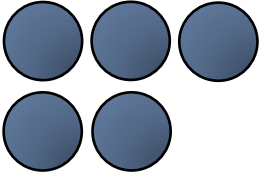
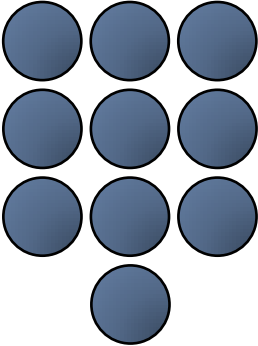
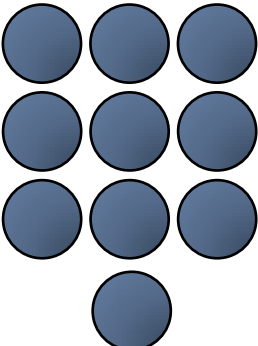
Tens	Ones	tenths	hundredths
			
	3	9	5

What number is represented?

What happens if 1 tenth is added?

Have a think



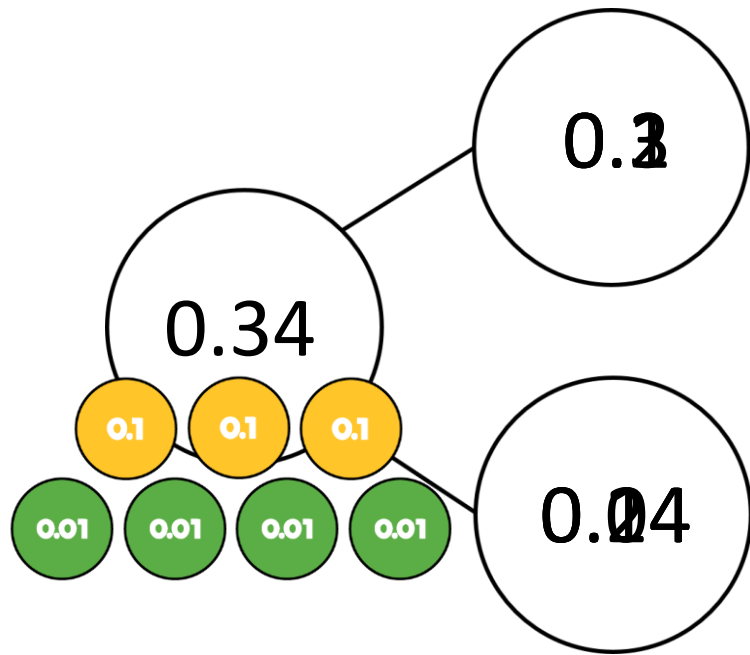
Tens	Ones	tenths	hundredths
			
	5	0	0

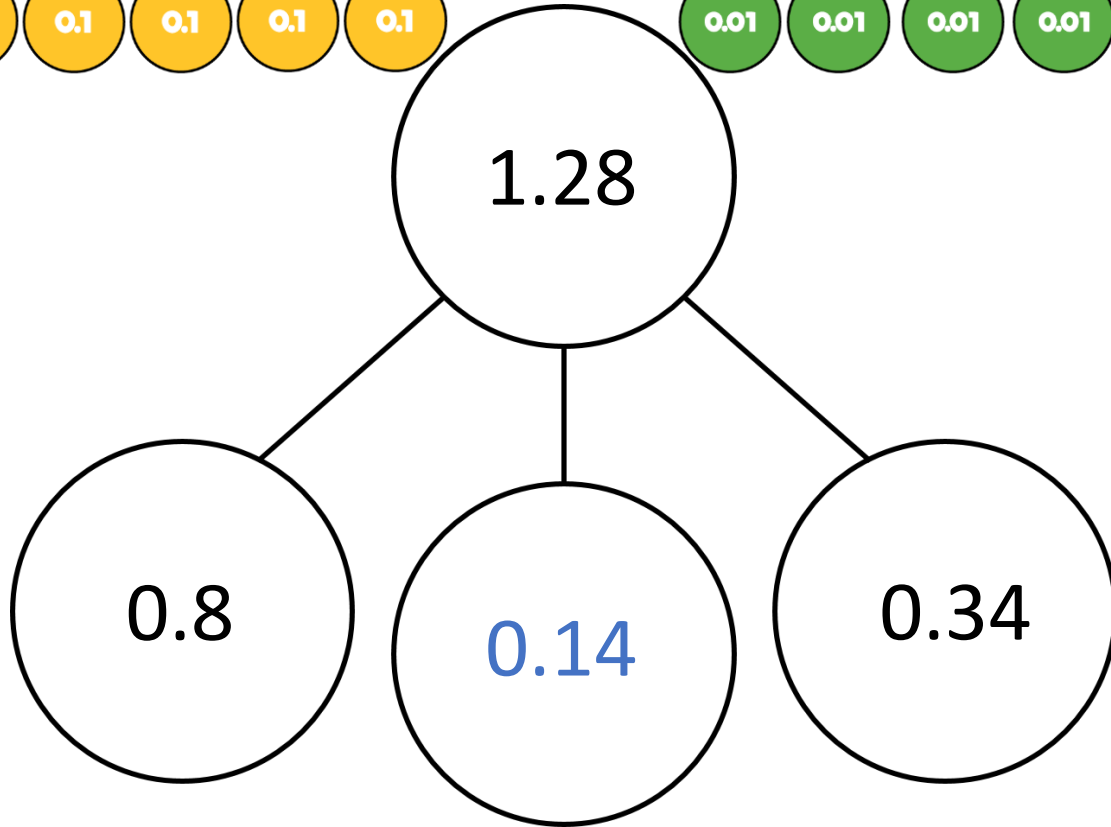
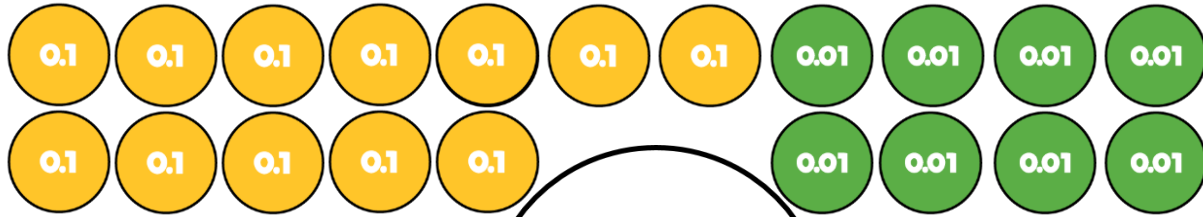
What number is represented?

What happens if 1 hundredth is added?

Have a think







Have a think



YOUR TURN

Have a go at the rest of
the worksheet

