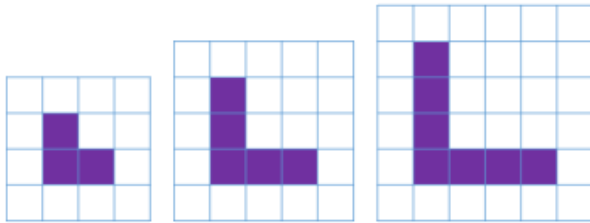


Friday Green Challenge



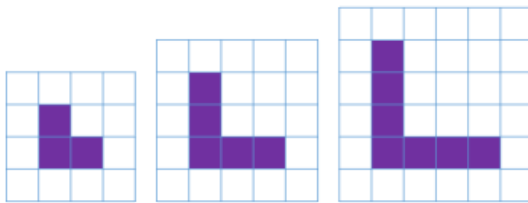
Look at the shapes. Can you spot the pattern and explain how the area is changing each time?

Draw the next shape. What is its area?

Can you predict what the area of the 6th shape would be?

Can you spot any patterns in your answers?

Friday Green Challenge



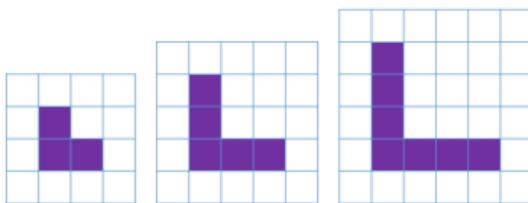
Look at the shapes. Can you spot the pattern and explain how the area is changing each time?

Draw the next shape. What is its area?

Can you predict what the area of the 6th shape would be?

Can you spot any patterns in your answers?

Friday. Green Challenge



Look at the shapes. Can you spot the pattern and explain how the area is changing each time?

Draw the next shape. What is its area?

Can you predict what the area of the 6th shape would be?

Can you spot any patterns in your answers?