


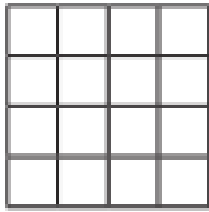
# Friday Red Challenge

Draw a shape with the given area.


a) area = 7 squares




b) area = 13 squares



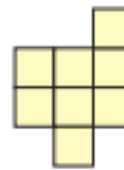
Draw two different rectangles, each with an area of 12 squares.



a) Draw two different shapes, each with an area of 8 squares.



a) Add squares to this shape to make it into a square.



b) What is the area of the square you have made?

Shade more squares to make the area 11 squares.

