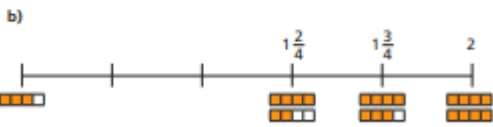
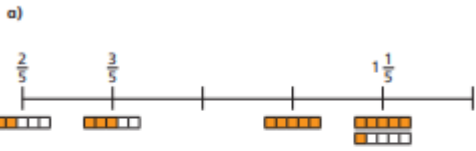


Friday Red Challenge

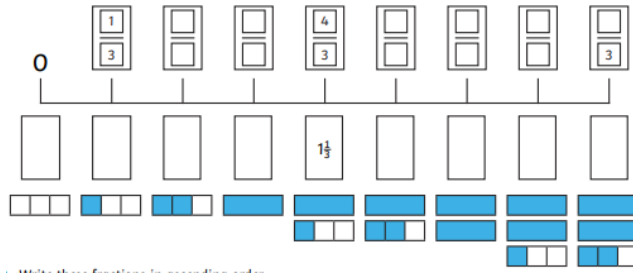
Complete the number lines.



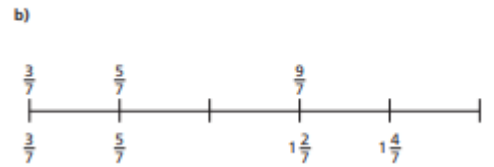
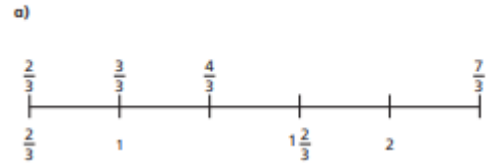
Write the next three fractions in each sequence.

- a) $\frac{1}{8}, \frac{2}{8}, \frac{3}{8} \dots$
- b) $\frac{1}{4}, \frac{2}{4}, \frac{3}{4} \dots$
- c) $\frac{1}{4}, \frac{3}{4}, 1\frac{1}{4} \dots$
- d) $4, 3\frac{1}{3}, 2\frac{2}{3} \dots$

Complete the number line by filling in the missing fractions and mixed numbers.



Complete the number lines.



Complete the number lines by filling in the missing fractions and mixed numbers.

