







Monday Red Challenge

Dora uses base 10 to work out 34×3

Tens	Ones
	
	
	

Use base 10 to work out 3×28 and 3×36

$3 \times 28 = \square$

$3 \times 36 = \square$

$7 \times 32 = \square$

$4 \times 56 = \square$

Use a number line to complete the multiplications.

$5 \times 32 = \square$



Use a number line to answer the following questions.



following questions.

1. $5 \times 25 =$

2. $6 \times 65 =$

3. $2 \times 85 =$

4. $4 \times 36 =$

5. $7 \times 28 =$