

ADD EQUAL GROUPS



GET READY



1) Are the groups equal?



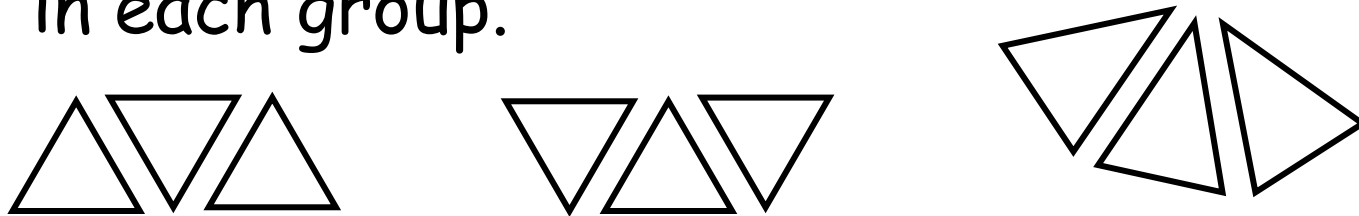
2) Draw 3 equal groups with 3 triangles in each group.

3) How many triangles have you drawn altogether?

1) Are the groups equal?



2) Draw 3 equal groups with 3 triangles in each group.



3) How many triangles have you drawn altogether? 9

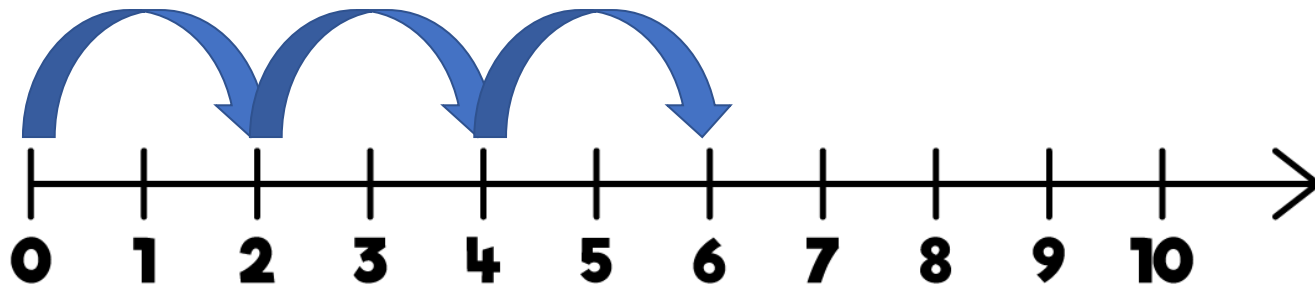
LET'S LEARN






There are equal groups of

$$\boxed{2} + \boxed{2} + \boxed{2} = \boxed{6}$$






There are $\boxed{3}$ wheels on each tricycle.

There are $\boxed{4}$ tricycles.

There are $\boxed{4}$ equal groups of $\boxed{3}$

$$\boxed{3} + \boxed{3} + \boxed{3} + \boxed{3} = \boxed{12}$$



There are $\boxed{4}$ equal groups of $\boxed{5}$

1	2	3	4	5	6	7	8	9	10
11	12	13	14	15	16	17	18	19	20
21	22	23	24	25	26	27	28	29	30

$$\boxed{5} + \boxed{5} + \boxed{5} + \boxed{5} = \boxed{20}$$


YOUR TURN

Have a go at the
questions 1 and 2
on the worksheet




$$\boxed{3} + \boxed{3} + \boxed{3} + \boxed{3} = \boxed{12}$$

There are $\boxed{4}$ equal groups of $\boxed{3}$



$$\boxed{5} + \boxed{5} + \boxed{5} = \boxed{15}$$

There are $\boxed{3}$ equal groups of $\boxed{5}$



YOUR TURN

Have a go at the rest
of the questions
on the worksheet

