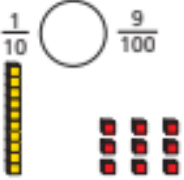
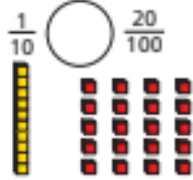
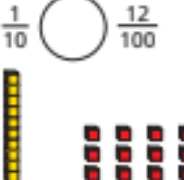



Monday Yellow Challenge

Write <, > or = to compare the fractions.

a) $\frac{1}{10}$ ○ $\frac{9}{100}$


c) $\frac{1}{10}$ ○ $\frac{20}{100}$


b) $\frac{1}{10}$ ○ $\frac{12}{100}$


d) $\frac{2}{10}$ ○ $\frac{20}{100}$


3

Eva: You can only partition 25 hundredths into 2 tenths and 5 hundredths.

Jack: I can partition it another way.

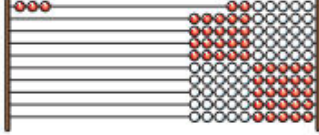
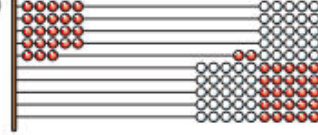
Who do you agree with? Explain why.

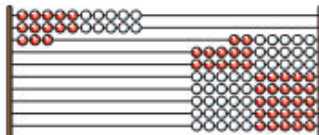
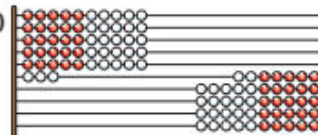
Amir is counting 67 hundredths on a bead string.

Amir: This will take a long time, because I have to count 67 beads.

Annie: ... itter well.

These are Rekenreks made from 100 beads.
 Each Rekenrek represents one whole.
 Write the fraction represented on the left and on the right.

a)  c) 

b)  d) 

Cara has been writing equivalents between tenths and hundredths. Tick or cross each statement. If there is a mistake, write the correct answer.

Equivalents	✓ or ✗	Correction
$\frac{30}{100} = \frac{3}{10}$		
$\frac{55}{100} = \frac{5}{10}$ and $\frac{5}{100}$		
$\frac{49}{10} = \frac{4}{10}$ and $\frac{9}{10}$		
$\frac{89}{100} = \frac{8}{100}$ and $\frac{9}{10}$		
$\frac{7}{10}$ and $\frac{4}{100} = \frac{74}{10}$		
$\frac{65}{10} = 6$ and $\frac{5}{100}$		