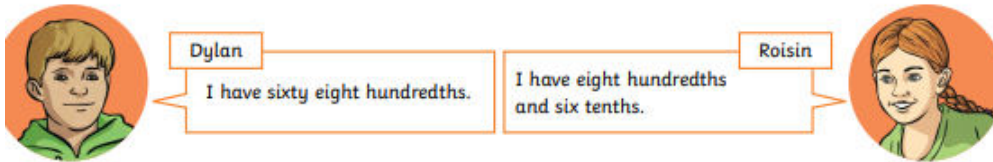


## Tuesday Green Challenge






Who has the most? Explain your answer. Can you use a diagram to explain?



Dylan: I have sixty eight hundredths.

Roisin: I have eight hundredths and six tenths.

2) Read each child's statement and write in the correct fraction that matches.

	Craig	My fraction has five tenths.	
	Lois	My fraction is greater than $\frac{57}{100}$ .	
	Ted	My fraction has fifty four hundredths.	
	Raj	My fraction can be partitioned into $\frac{5}{10}$ and $\frac{5}{100}$ .	
	Gina	My fraction can be partitioned into $\frac{26}{100}$ and $\frac{3}{10}$ .	

$$\frac{54}{100}$$

$$\frac{57}{100}$$

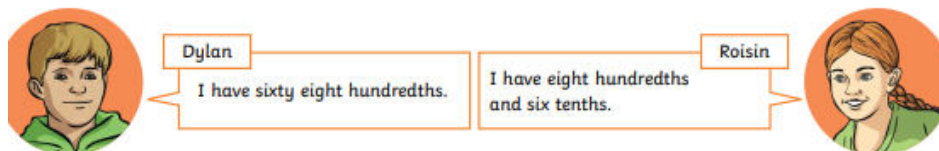
$$\frac{56}{100}$$

$$\frac{59}{100}$$

$$\frac{55}{100}$$

## Tuesday Green Challenge






Who has the most? Explain your answer. Can you use a diagram to explain?



Dylan: I have sixty eight hundredths.

Roisin: I have eight hundredths and six tenths.

2) Read each child's statement and write in the correct fraction that matches.

	Craig	My fraction has five tenths.	
	Lois	My fraction is greater than $\frac{57}{100}$ .	
	Ted	My fraction has fifty four hundredths.	
	Raj	My fraction can be partitioned into $\frac{5}{10}$ and $\frac{5}{100}$ .	
	Gina	My fraction can be partitioned into $\frac{26}{100}$ and $\frac{3}{10}$ .	

$$\frac{54}{100}$$

$$\frac{57}{100}$$

$$\frac{56}{100}$$

$$\frac{59}{100}$$

$$\frac{55}{100}$$