


Tuesday Red Challenge

Complete the table.

Hundred square	Words	Fraction	Decimal
	thirty-six hundredths		
		$\frac{82}{100}$	
			0.27
	seven tenths		
			0.3

Complete the sentence and colour the image to show one hundredth.



A hundredth is one whole split into a _____ equal parts.


Complete the grid.

Model	Words	Fraction	Decimal
			0.12
	four hundredths		

Draw decimal place value counters to represent the numbers.



a) 0.03

c) 0.63



b) 0.6

d) 0.36



Circle the models that **do not** represent 10 hundredths.

