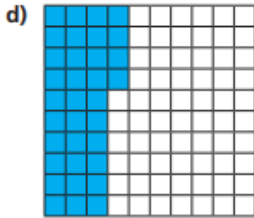
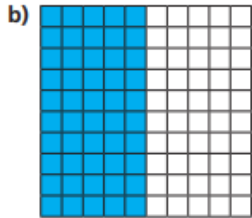
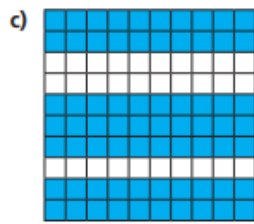
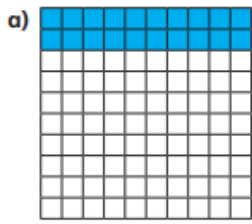


Tuesday Red Challenge

The hundred square represents 1 whole.

What fraction of each hundred square is shaded?



Use a hundred square.

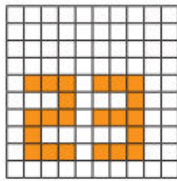
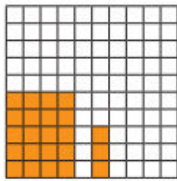
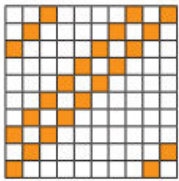
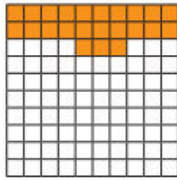
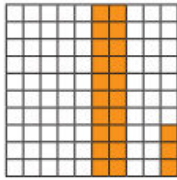

What fraction of the whole does each represent?

- a) 4 full rows d) 2 full rows and 5 squares
 b) 6 full columns e) 3 full columns and 8 squares
 c) 13 squares

Complete the sentences.

- a) 4 tenths is equivalent to hundredths.
 b) 70 hundredths is equivalent to tenths.
 c) 5 tenths is equivalent to hundredths or 1 _____

Which hundred squares have $\frac{23}{100}$ shaded?



- a) There are _____ squares shaded out of _____.

There is _____ row shaded out of _____

The shaded area represents $\frac{\square}{\square}$ or $\frac{\square}{\square}$

