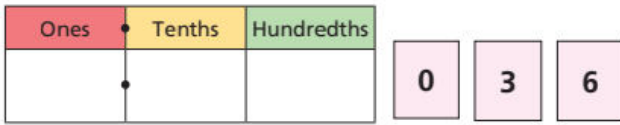


Whitney, Tommy, Esther and Dexter each have the same three digit cards and a place value chart.

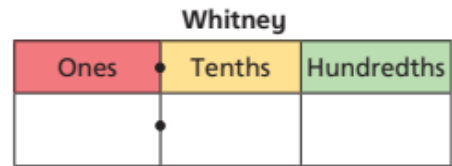
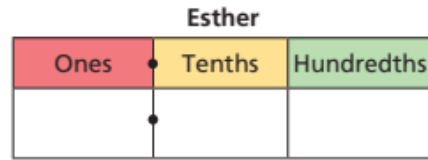
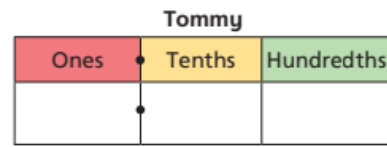
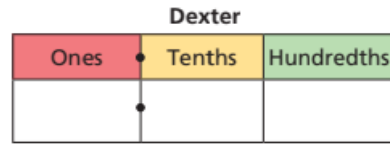


When they put the cards in the chart with one in each space, they each make a different number.

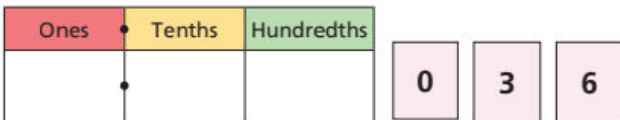
Use the clues to work out each person's number and write it on their place value chart.

- Dexter makes the greatest number possible.
- Tommy makes the number closest to four.
- Esther and Whitney choose the two numbers closest together (Esther makes the slightly greater number).

Green
Challe
nge



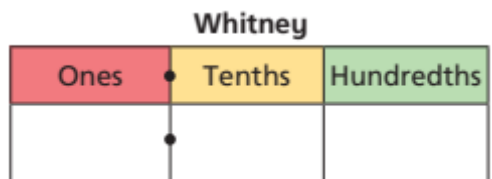
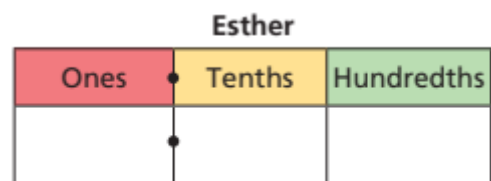
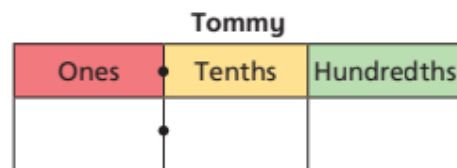
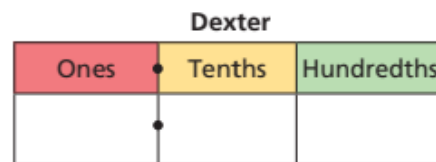
Whitney, Tommy, Esther and Dexter each have the same three digit cards and a place value chart.



When they put the cards in the chart with one in each space, they each make a different number.

Use the clues to work out each person's number and write it on their place value chart.

- Dexter makes the greatest number possible.
- Tommy makes the number closest to four.
- Esther and Whitney choose the two numbers closest together (Esther makes the slightly greater number).



Wednesday

Green Challenge

