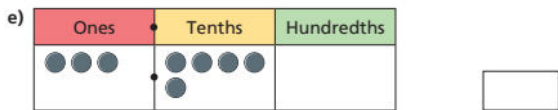
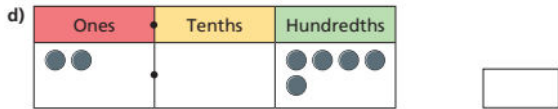
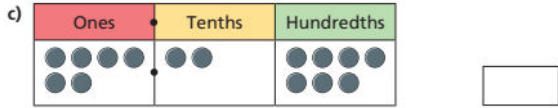
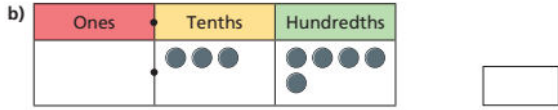
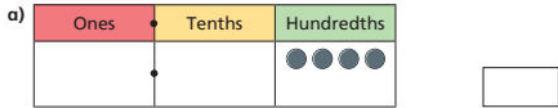


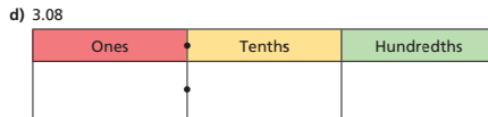
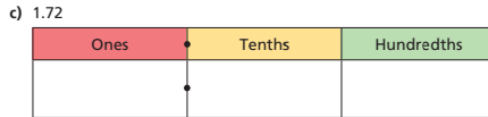
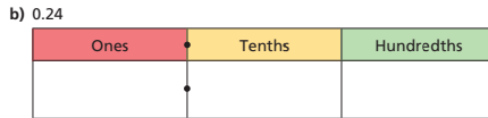
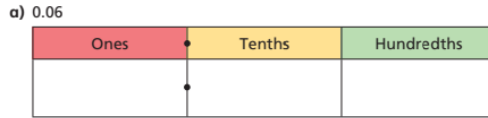
Wednesday Red Challenge

Write the decimal that is represented in each place value chart.

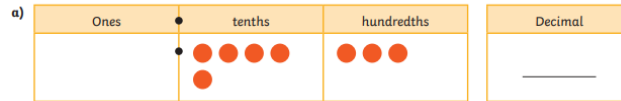


Use place value counters to make each number.

Draw your answers on the place value charts.



For each question, make sure the place value grid, decimal box and sentence stems all show the same decimal number.



There are ____ ones.

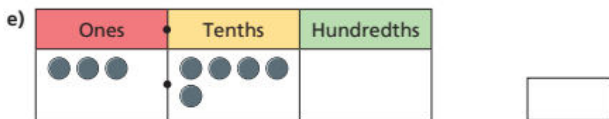
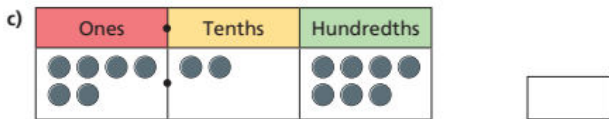
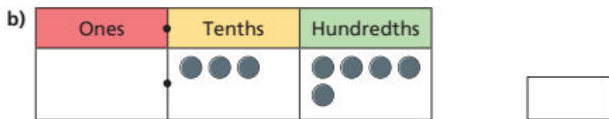
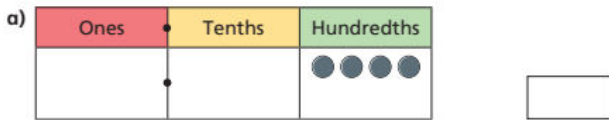
There are ____ tenths.

There are ____ hundredths.

_____ is the decimal shown.

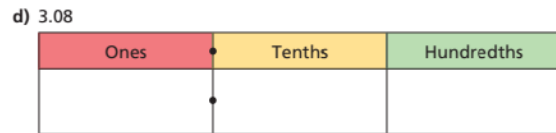
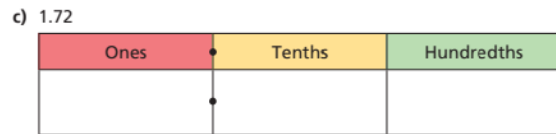
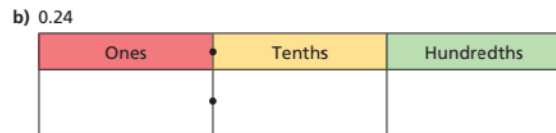
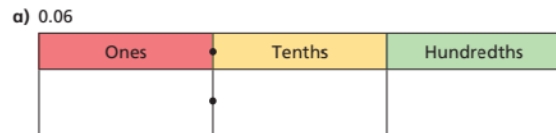
Wednesday Red Challenge

Write the decimal that is represented in each place value chart.




Use place value counters to make each number.

Draw your answers on the place value charts.



For each question, make sure the place value grid, decimal box and sentence stems all show the same decimal number.



There are ____ ones.

There are ____ tenths.

There are ____ hundredths.

_____ is the decimal shown.