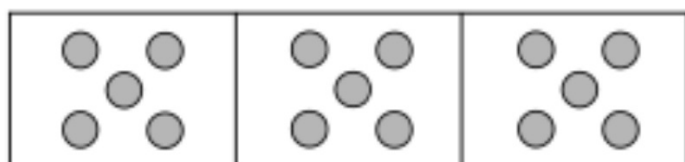


1 Ben, Che and Tam have 4 stickers each.



How many stickers are there altogether?

2 Write a multiplication sentence to represent the picture.

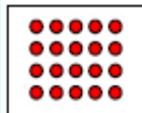


$$\square \times \square = \square$$


Complete:

Double 7 is .


Match the array to its correct multiplication.




4×3



5×4



5×3



3×2

$$\boxed{8} \times \boxed{2} = \boxed{}$$

$$\boxed{9} \times \boxed{5} = \boxed{}$$

$$\boxed{8} \times \boxed{10} = \boxed{}$$

There are 20 fish and 5 bowls.
Each bowl has the same number of fish.



How many fish in each bowl?

Complete the table. The first one has been completed for you.

| Division | Answer | Multiplication |
|----------------|--------|-------------------|
| $40 \div 5 =$ | 8 | $8 \times 5 = 40$ |
| $22 \div 2 =$ | | |
| $50 \div 5 =$ | | |
| $90 \div 10 =$ | | |
| $35 \div 5 =$ | | |

Between 0 and 24 there are 11 odd numbers.

True or false? How do you know?

Mo found four multiplication sentences that could represent the picture. Write Mo's multiplication sentences.



$$\square \times \square = \square$$

$$\square \times \square = \square$$

$$\square \times \square = \square$$

$$\square \times \square = \square$$

Complete the comparison to make it true.

$$\boxed{4} \times \boxed{2} < \boxed{55} \div \boxed{}$$