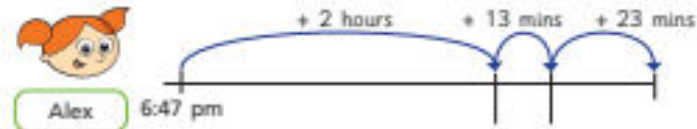



The time is 6:47 pm.

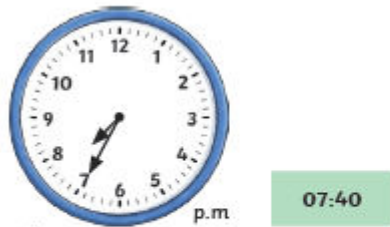
Dexter, Alex and Mo are using number lines to work out what time it will be in 2 hours and 36 minutes.

Fill in the missing times in 24-hour format.



Whose method do you prefer?

Whitney thinks the time is 22:10
What mistake has Whitney made?

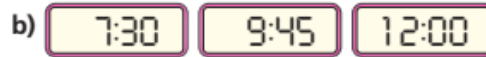


← Earliest

→ Latest

Do you agree that Pasha has ordered the times correctly? Correct and explain any mistakes he may have made.

Complete the sequences by writing the next two times in 24-hour digital format.



Thursday Yellow Challenge

Nijah is delivering a parcel to her friend's house.

She leaves her house at



She arrives at her friend's house at 11:50

She leaves her friend's house at 11:55

If her return journey takes the same amount of time, what time will it be when she gets home?

Write your answer in 24-hour digital format.

=]